

Activity Sheet

Shirt Number - Multiplication

Objective: To practice the 2, 5 and 10 times tables.

Task 1 – Answer the questions below by multiplying the players shirts together.



 ×  =

 ×  =

 ×  =

 ×  =



 ×  =

 ×  =

Task 2 – Using the information in the box below, fill in the blank shirts and then work out the multiplications.

Paul Caddis wears the number 2 shirt
 Dion Conroy wears the number 4 shirt
 Jonathan Grounds wears the number 5 shirt
 Diallang Jaiyesimi wears the number 7 shirt
 Brett Pitman wears the number 8 shirt
 Tyler Smith wears the number 9 shirt

Paul Caddis x Brett Pitman

 ×  =

Tyler Smith x Jonathan Grounds

 ×  =

(Paul Caddis + Dion Conroy) x Jonathan Grounds

 ×  =